



FORM 4

MATHEMATICS
Non-Calculator Paper

TIME: 15 minutes

Question	1	2	3	4	5	Total
Mark						

DO NOT WRITE ABOVE THIS LINE

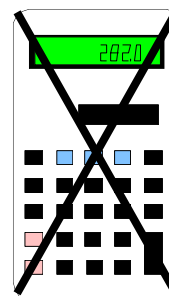
Name: _____

Class: _____

INSTRUCTIONS TO CANDIDATES:

Read all the questions carefully before you start answering.

- Answer all questions.
- This paper carries 25 marks.
- **Calculators, protractors** and other mathematical instruments are **NOT ALLOWED.**



1. Work out

a) $83.179 \times 100 =$ _____

b) $567.23 \div 10 =$ _____

c) $743.89 + 19.27 =$ _____

d) $1.483 \times 5 =$ _____

(6 marks)

2. Match

60 seconds

1 day

7 days

1 year

12 months

1 minute

24 hours

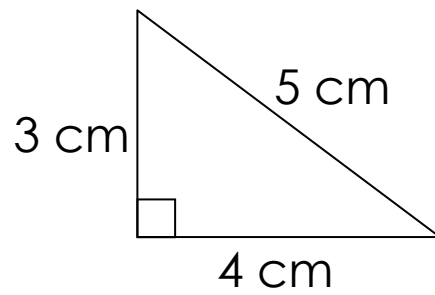
1 hour

60 minutes

1 week

(5 marks)

3.



a) What is the **perimeter** of the triangle?

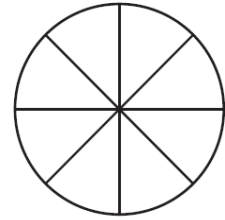
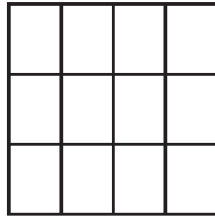
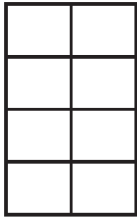
Ans: _____ cm

b) What is the **area** of the triangle?

Ans: _____ cm²

(5 marks)

4. a) Colour $\frac{3}{4}$ of each shape



b) Fill in

$$\frac{3}{4} = \frac{\square}{8} = \frac{\square}{12}$$

(5 marks)

5. Fill in

a) 17, 19, 21, _____, _____

b) 30, 27, 24, _____, _____

(4 marks)

END OF NON CALCULATOR PAPER
